

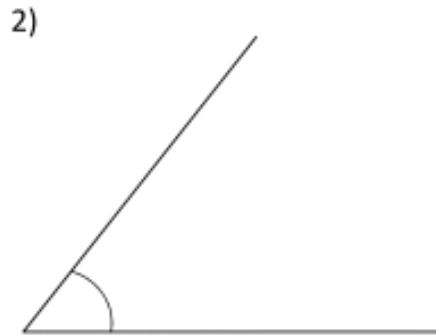
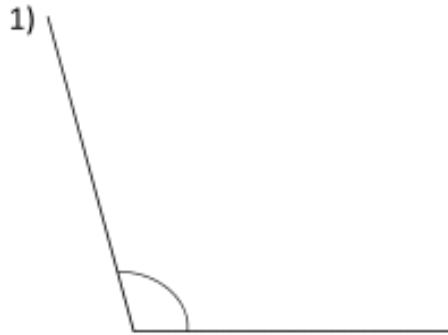
Geometry

Name _____

Warm Up

Aug 21, 2020

Measure and classify each angle.



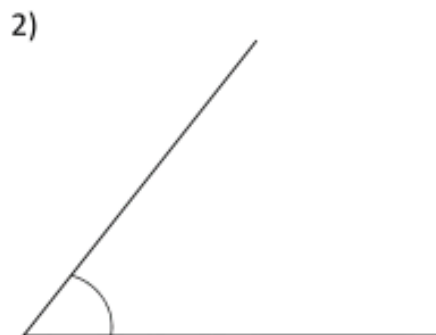
Geometry

Name _____

Warm Up

Aug 21, 2020

Measure and classify each angle.



Using your protractor draw an angle with the given measure. Classify the angle as obtuse, acute, right.

145°

20°

Using your protractor draw an angle with the given measure. Classify the angle as obtuse, acute, right.

145°

20°